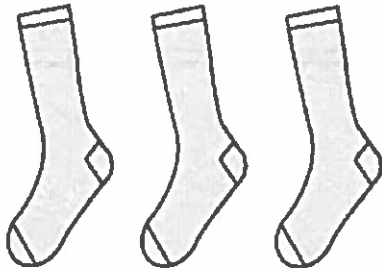


1 Find the sock that is the same as the socks in the row.



A



B



C



D




2 Which number sentence shows joining the two groups?





- A 3 and 4 is 7.
- B 3 and 5 is 8.
- C 2 and 5 is 7.
- D 4 and 6 is 10.

3 How many flowers are there?



- A 4
- B 12
- C 15
- D 20

4 Which picture shows a girl standing after a boy with a striped shirt?



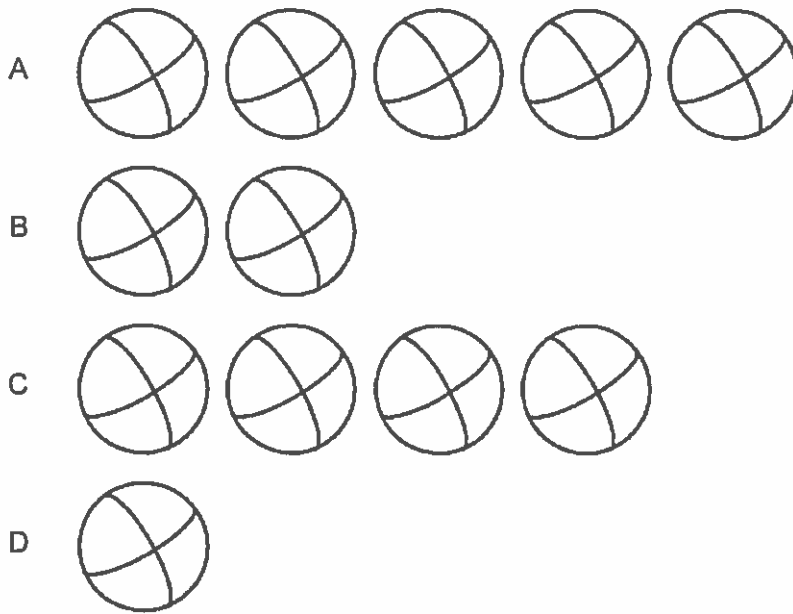
5 Look at the number of counters.



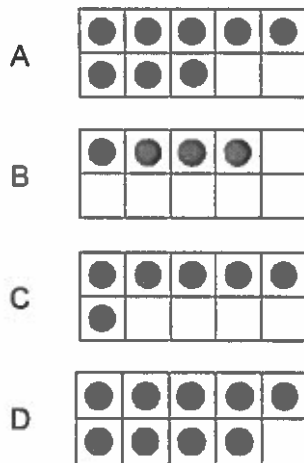
Which shows 2 fewer counters?



6 Which shows 2 balls?



7 Which group has 1 more than 3?




8 Which numbers show counting by 2s?

1	2	3	4	5	6	7	8	9	10
11	12	13	14	15	16	17	18	19	20
21	22	23	24	25	26	27	28	29	30

- A 11, 12, 13, 14
- B 9, 12, 15, 18
- C 20, 22, 24, 26
- D 3, 13, 23, 33

9 Which number sentence tells about the bees?



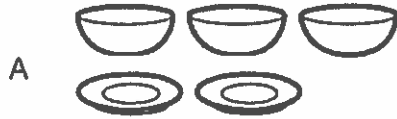
- A  $8 - 2 = 6$
- B  $6 - 2 = 4$
- C  $4 - 2 = 2$
- D  $6 + 2 = 8$

10 Which number sentence tells about the picture?

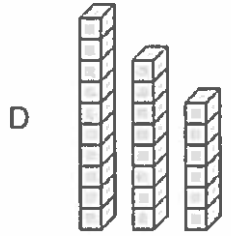
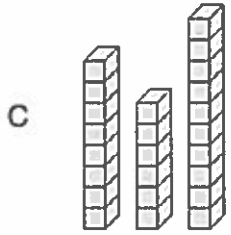
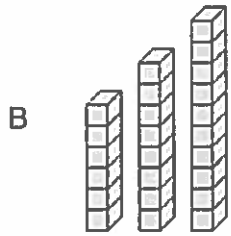
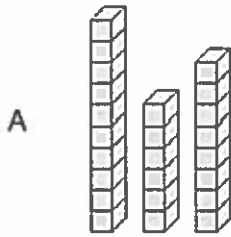


- A  $10 + 2 = 12$
- B  $10 + 3 = 13$
- C  $10 + 6 = 16$
- D  $10 + 8 = 18$

1 Which shows fewer bowls than plates?




2 Which cube stacks are in order from shortest to tallest?



- 3 Karen picked 4 apples.  
Then she picked 2 more.  
How many did she pick in all?


Which number sentence shows this story?



4                      and                      2

- A  $4 + 3 = 7$
- B  $4 + 2 = 6$
- C  $4 + 1 = 5$
- D  $4 + 4 = 8$

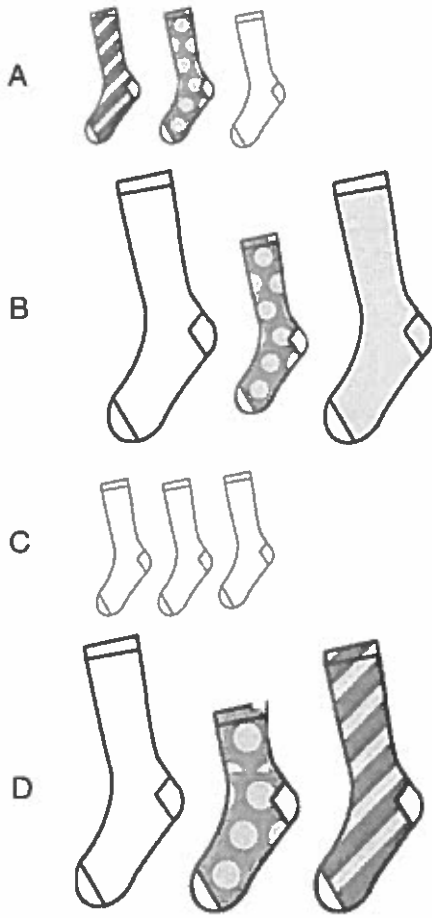
- 4 How many counters are there?




- A 12
- B 14
- C 17
- D 18



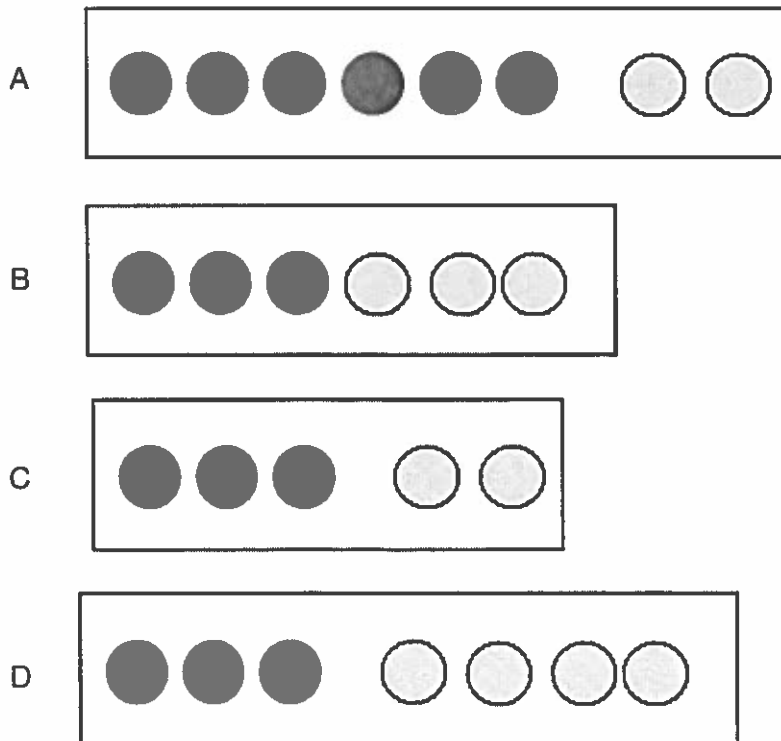
5 Which shows the socks sorted by size and pattern?



6 Which shows 3 cats?



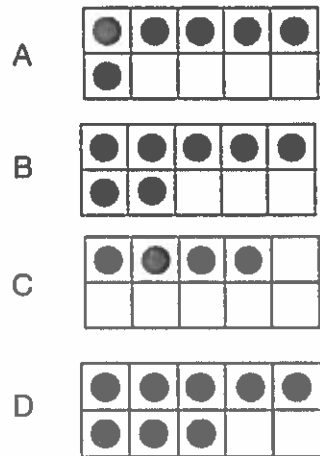
7 Which shows one way to make 8?



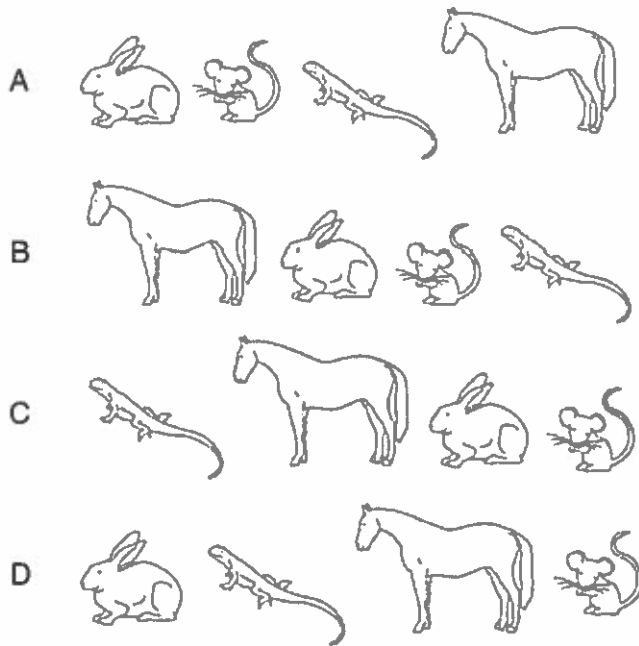
8 Which shows 9 muffins?




9 Which group has one more than 7?



10 Which shows the rabbit second in the row?




11 There are 6 dogs at the kennel.  
Rita took away 2 dogs.  
Which number sentence matches the picture?



- A  $4 - 3 = 1$
- B  $6 - 1 = 5$
- C  $6 - 3 = 3$
- D  $6 - 2 = 4$

12 Which shows the number of counters?




- A 25
- B 30
- C 35
- D 40

13 Which number is missing?



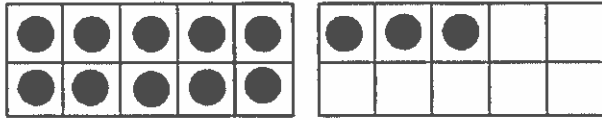
- A
- B
- C
- D

14 Which shows  $10 + 5$ ?



- A 12
- B 13
- C 15
- D 16

15 Which tells about the picture below?



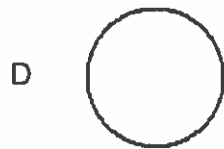
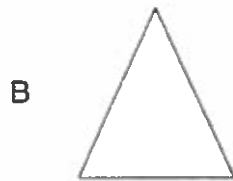

- A 10 and 1 is 11.
- B 10 and 2 is 12.
- C 10 and 3 is 13.
- D 10 and 5 is 15.

16 There are 6 birds in a tree.  
Then 2 birds fly away.  
How many are left in the tree?  
Which number sentence tells this story?

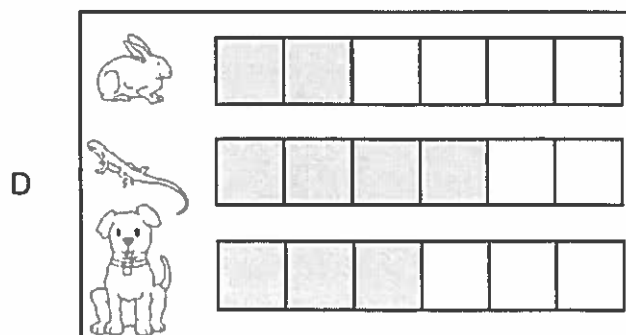
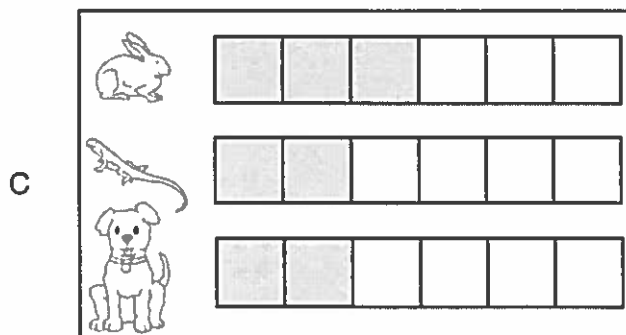
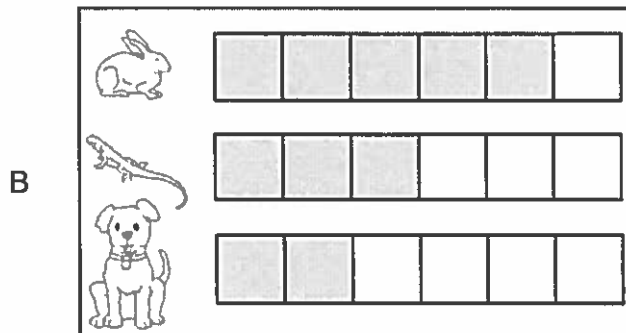
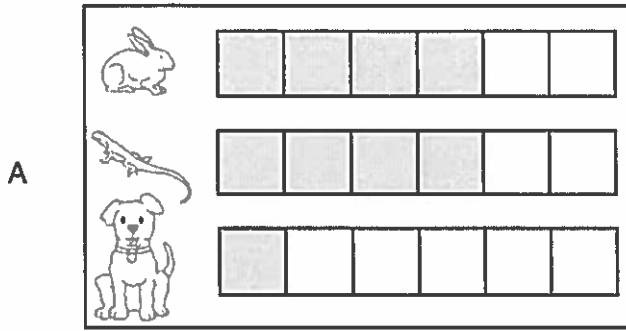


- A 6 take away 2 is 4.
- B 4 take away 2 is 2.
- C 5 take away 3 is 2.
- D 3 take away 2 is 1.

17 Which shape is a circle?



18 How can you make a graph to show how many of each animal are in the picture?






19



Which object is to the left of the ?



20 Which object can roll?

